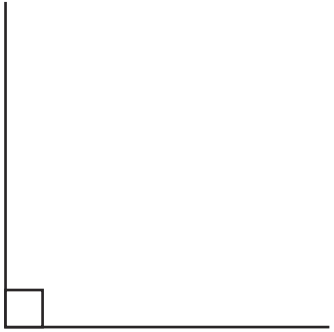
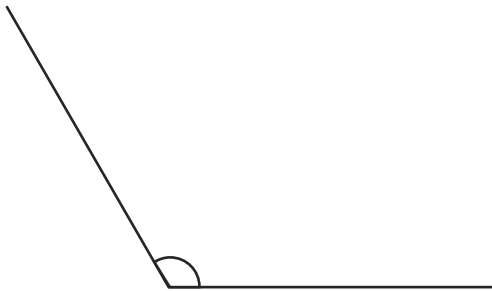


# Types of Angles Worksheet

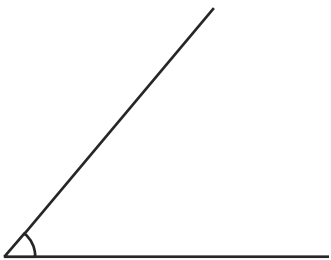
Look at these different angles:



Right Angle - a square  $90^\circ$ .



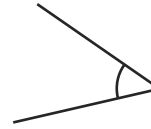
Obtuse Angle - is greater than a right angle but less than a straight line (as anything over  $180^\circ$  is a reflex angle).



Acute Angle - is smaller than a right angle.

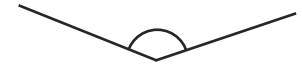
Write the type of angle:

1.



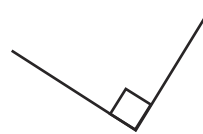
\_\_\_\_\_

2.



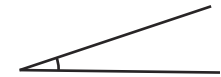
\_\_\_\_\_

3.



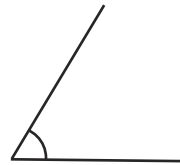
\_\_\_\_\_

4.



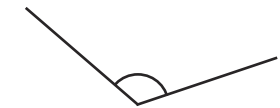
\_\_\_\_\_

5.



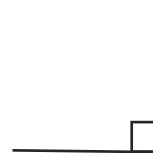
\_\_\_\_\_

6.



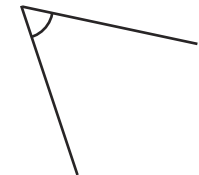
\_\_\_\_\_

7.



\_\_\_\_\_

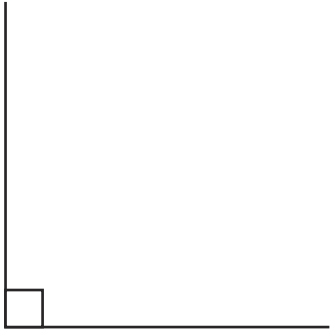
8.



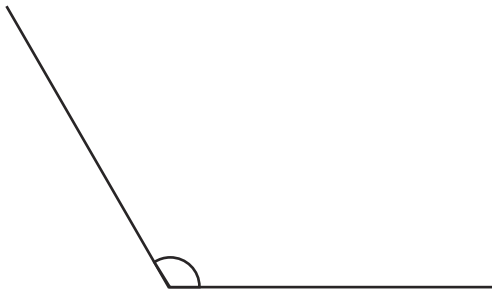
\_\_\_\_\_

# Types of Angles Worksheet Answers

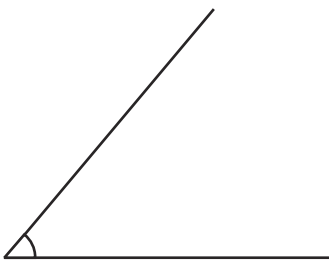
Look at these different angles:



Right Angle - a square  $90^\circ$ .



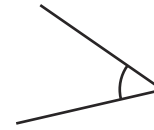
Obtuse Angle - is greater than a right angle but less than a straight line (as anything over  $180^\circ$  is a reflex angle).



Acute Angle - is smaller than a right angle.

Write the type of angle:

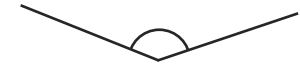
1.



**acute**

---

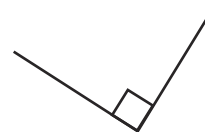
2.



**obtuse**

---

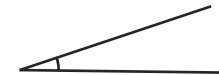
3.



**right**

---

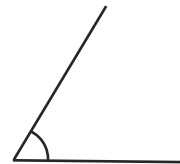
4.



**acute**

---

5.



**acute**

---

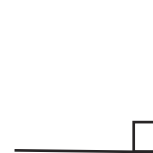
6.



**obtuse**

---

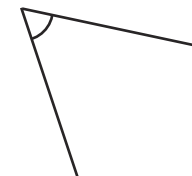
7.



**right**

---

8.



**acute**

---